



Use the array provided to solve each problem.


1)  $33 \times 30 =$




2)  $20 \times 23 =$




3)  $20 \times 21 =$




4)  $20 \times 27 =$



5)  $20 \times 26 =$



6)  $20 \times 25 =$



Answers

1. \_\_\_\_\_

2. \_\_\_\_\_

3. \_\_\_\_\_

4. \_\_\_\_\_

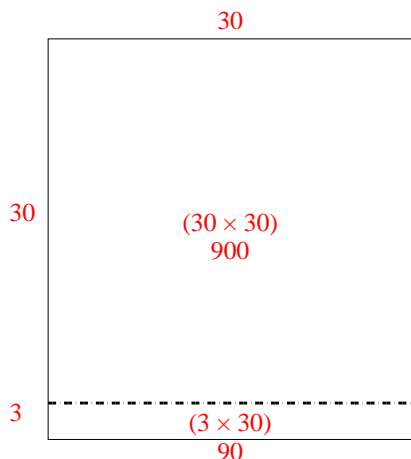
5. \_\_\_\_\_

6. \_\_\_\_\_

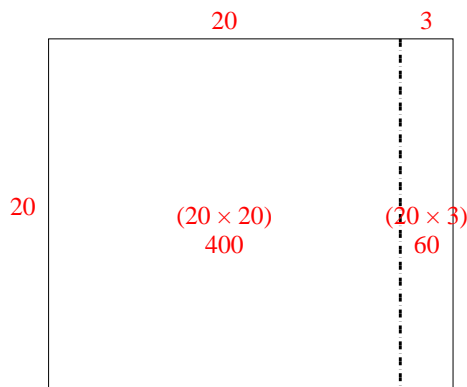


Use the array provided to solve each problem.

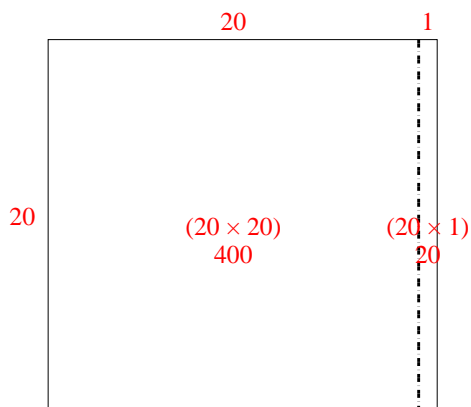
1)  $33 \times 30 =$



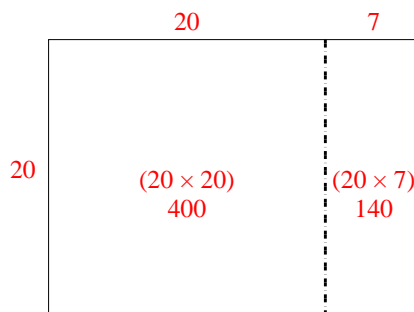
2)  $20 \times 23 =$



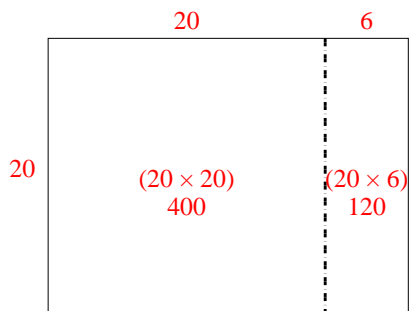
3)  $20 \times 21 =$



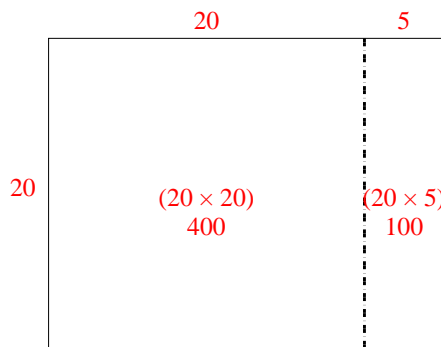
4)  $20 \times 27 =$



5)  $20 \times 26 =$



6)  $20 \times 25 =$



Answers

1. 990

2. 460

3. 420

4. 540

5. 520

6. 500